

## Types of Reactions Worksheet

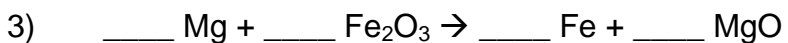
Balance the following equations and indicate the type of reaction taking place:



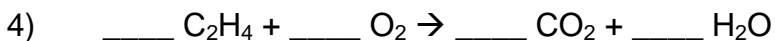
Type of reaction: \_\_\_\_\_



Type of reaction: \_\_\_\_\_



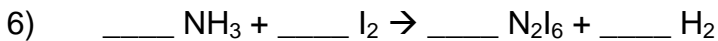
Type of reaction: \_\_\_\_\_




Type of reaction: \_\_\_\_\_



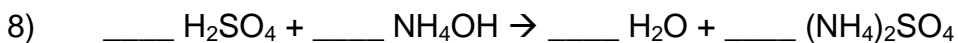
Type of reaction: \_\_\_\_\_



Type of reaction: \_\_\_\_\_



Type of reaction: \_\_\_\_\_



Type of reaction: \_\_\_\_\_

